

Name the Time Signatures!

Grade 1 Music Theory

1. Write the meanings of each of the time signatures below.


2 4	
----------------	--


C	
----------	--


4 4	
----------------	--


3 4	
----------------	--


2. Draw the appropriate time signature in front of each of the rhythms below.


Time Signature:	 etc.
-----------------	--


Time Signature:	 etc.
-----------------	--


Time Signature:	 etc.
-----------------	--

Time Signature:	 etc.
-----------------	--


Time Signature:	 etc.
-----------------	--

Time Signature:	 etc.
-----------------	--

Time Signature:	 etc.
-----------------	--

Time Signature:	 etc.
-----------------	--

Time Signature:	 etc.
-----------------	--

Time Signature:	 etc.
-----------------	--